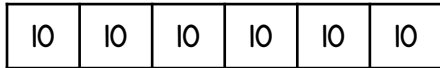



Name _____

1 Match each statement to the correct bar model.

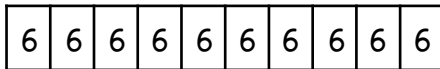
6 bags of
10 sweets



10 bags of
6 sweets

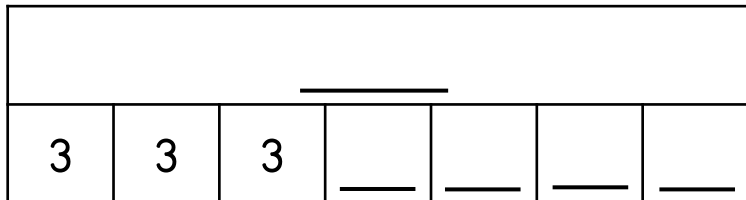


10 bags of
10 sweets



1 mark

2 Complete the bar model to show 7×3



1 mark

3 Each box contains 6 eggs.



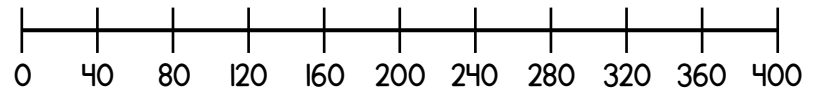
Complete the fact family to represent the eggs.

<input type="text"/>	×	<input type="text"/>	=	<input type="text"/>
<input type="text"/>	×	<input type="text"/>	=	<input type="text"/>
<input type="text"/>	÷	<input type="text"/>	=	<input type="text"/>
<input type="text"/>	÷	<input type="text"/>	=	<input type="text"/>

1 mark

4 Use the number line to help you work out

$$6 \times 40 = \boxed{}$$



1 mark

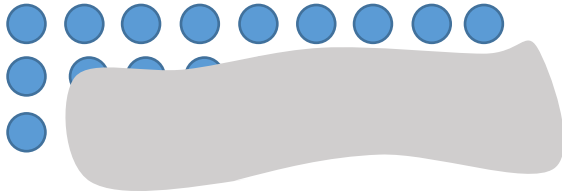
5 Complete the calculations.

$$5 \times 30 = \boxed{} \quad 180 \div 2 = \boxed{}$$

$$5 \times 300 = \boxed{} \quad 630 \div \boxed{} = 70$$

3 marks

- 6 Leon makes an array using counters. Part of the array is covered.



Write down a multiplication that the array shows.

$$\square \times \square$$

How many counters are in the array?

_____ counters

- 7 A bag costs £11 and a mug costs £7
Annie spends £80 in total on bags and mugs.
She buys 6 bags.
How many mugs does she buy?

_____ mugs

- 8 The product of two numbers is 48
The sum of the two numbers is 16
Circle the two numbers.

2 4 6 8 12 24

- 9 What is the value of the triangle?

$$7 \times \triangle = 8 \times \triangle$$

$$\triangle = \underline{\hspace{2cm}}$$

- 10 A sticker book can fit 6 stickers on each page.
8 out of 20 pages of the book are full.
How many **more** stickers are needed to complete the sticker book?

_____ stickers

1 mark

1 mark

2 marks

1 mark

1 mark

2 marks

Circle how confident you feel with multiplication & division.

1 2 3 4 5
Not Very
confident confident