

# Pirate

## I Spy and Count Checklist Answers

Count the number of each type of pirate item and write the numeral in the box.

5 maps




9 parrots



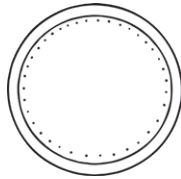
8 pirates



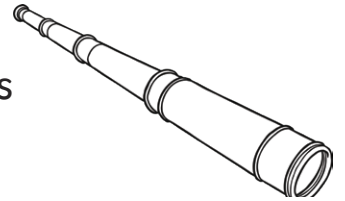
1 pirate ship




10 coins



4 telescopes



7 treasure chests



3 flags



2 pirate hats



7 hooks

