

Pirates

I Spy and Count Checklist Answers

Count the number of each type of pirate item and write the numeral in the box.

4 maps




16 parrots



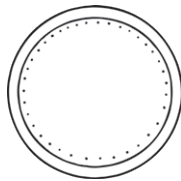
7 pirates



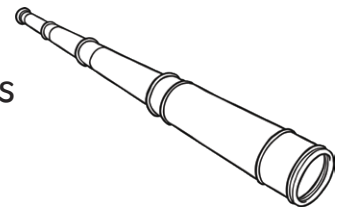
10 pirate ship



18 coins



20 telescopes



6 treasure chests



8 flags



15 pirate hats



11 hooks

