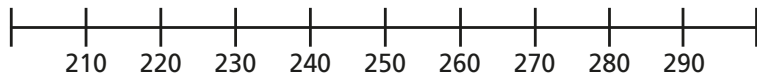


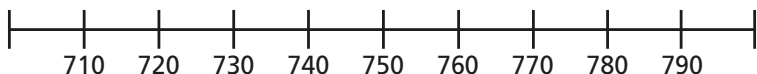
- 1** a) Which multiples of 100 do the numbers sit between?  
Complete the number line.



- b) Circle the number 270 on the number line.  
Which multiple of 100 is 270 closest to?  
270 rounded to the nearest 100 is

- c) Circle the number 230 on the number line.  
Which multiple of 100 is 230 closest to?  
230 rounded to the nearest 100 is

- 2** a) Which multiples of 100 do the numbers sit between?  
Complete the number line.



- b) Draw an arrow and label 713 on the number line.
- c) Which multiple of 100 is 713 closest to?  
713 rounded to the nearest 100 is

- d) Round each number to the nearest 100  
725    779    701    751    749    750


- 3** Round each number to the nearest 100

- a) 401      d) 190      g) 250  
b) 789      e) 89      h) 44  
c) 330      f) 708      i) 99

- 4** Round each number to the nearest 100

- a) **100** 100 10 1 1 1      d) XXIX

- b) 712



c) 

| H | T | O |
|---|---|---|
|   |   |   |

- f) CXVIII

- 5** Circle the numbers that round to 300 to the nearest 100

359      279      271      341      350      250

- 6** Circle the numbers that round to 200 to the nearest 100

150      207      196      249      250      190



3 Round each number to the nearest 100

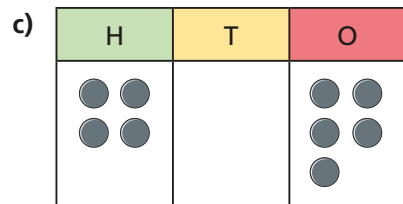

- a) 401      d) 190      g) 250
- b) 789      e) 89      h) 44
- c) 330      f) 708      i) 99

4 Round each number to the nearest 100

- a) 100 100 10 1 1 1

d) XXIX

b) 712



f) CXVIII

5 Circle the numbers that round to 300 to the nearest 100

- 359      279      271      341      350      250

6 Circle the numbers that round to 200 to the nearest 100

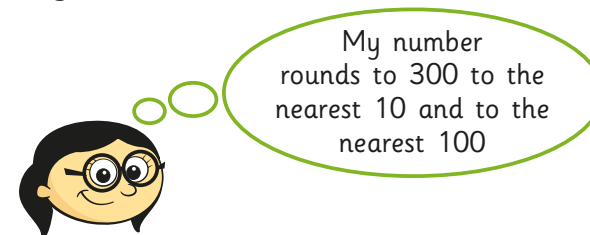
- 150      207      196      249      250      190

7 Complete the table.

|                            |     |     |     |     |    |
|----------------------------|-----|-----|-----|-----|----|
| Number                     | 624 | 371 | 289 | 750 | 38 |
| Rounded to the nearest 10  |     |     |     |     |    |
| Rounded to the nearest 100 |     |     |     |     |    |

8 There are 400 children in a school, to the nearest 100  
What is the least number of children in the school?  
What is the greatest number of children in the school?

9 Annie is thinking of a number.



What number could Annie be thinking of?  
Is this the only answer? Talk about it with a partner.