


Divide by 10

1 Complete the calculation shown by the array.



$$40 \div 10 = \square$$

2 Complete the calculations.

a) $30 \div 10 = \square$

d) $80 \div 10 = \square$

b) $60 \div 10 = \square$

e) $100 \div 10 = \square$

c) $90 \div 10 = \square$

f) $\square = 120 \div 10$

3 Balloons come in bags of 10


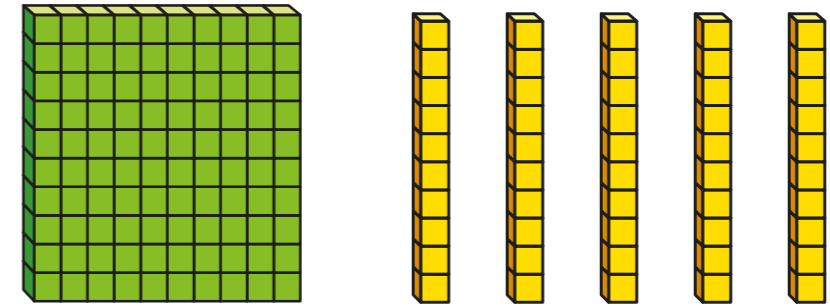
Huan has 130 balloons.

How many bags does he have?

Huan has \square bags of 10 balloons.



4 a) Whitney makes 150 using base 10



I am going to exchange my hundred for tens

Complete the sentences.

$$150 = 1 \text{ hundred} + \square \text{ tens}$$

$$1 \text{ hundred} = \square \text{ tens}$$

Whitney has \square tens altogether.

$$150 \div 10 = \square$$

b) Make 230 using base 10

Complete the sentences.

$$230 = \square \text{ hundreds} + \square \text{ tens}$$

$$\square \text{ hundreds} = \square \text{ tens}$$


There are \square tens altogether.

$$230 \div 10 = \square$$

5 Mr Smith has this amount of money.



He buys some rulers costing 10p each.



Mr Smith spends all of his money.

How many rulers does he buy?

6 Aisha has a bag of 10p coins.
She has £3 and 40p altogether.
How many 10p coins does Aisha have?

Aisha has 10p coins.



7 Fill in the missing numbers.

a) $360 \div 10 =$

d) $\div 10 = 41$

b) $630 \div 10 =$

e) $= 75 \text{ tens} \div 10$

c) $10 \times$ $= 520$

f) $86 =$ $\text{tens} \div 10$

8 A pool is 10 m long.
Annie and Mo are swimming lengths of the pool.
Annie swims 85 lengths.
Annie and Mo swim 1,240 m in total.
How many lengths does Mo swim?

9 Complete the calculations.

a) $360 \div 10 \div 3 =$

c) $720 \div 10 \div$ $= 8$

b) $450 \div 10 \div 5 =$

d) $\div 10 \div 4 = 1$

