

Maths
Learning
Number:
Place Value
(within 20)

Term 3 week 1 lesson 1

In focus



- 1) 1 ten and 3 ones _____
- 2) 2 tens and 0 ones _____
- 3) What is one more than ten? ____
- 4) Which is greater?



Lets learn



Who has the *most* letters in their name?



Whitney



Alex



Ron



Dexter


Who has the *least* letters in their name?

How many letters are in your name?


Guided practise




Mo



Annie



Dexter



Who has the *least* rolls?

Who has the *most* rolls?

Independent practise

Children to complete the worksheet



Plenary



Mrs Bunting has 16
sweets and Miss
Woollard has 16. Mrs
Bunting has the most.

Is that correct?

How do you know?

Maths
Learning
Number:
Place Value
(within 20)

Term 3 week 1 lesson 2

In focus



1) These numbers are placed in order from _____ to _____



2) What number is this? eighteen

3) What number is missing? 13, ____, 15


4) These are placed in order from _____ to _____






Lets learn

Count and order these from greatest to smallest.



How did they order these?
Was it:
greatest to smallest
or
smallest to greatest



The image shows three children and their corresponding number representations:

- Boy 1:** A boy with brown hair and glasses. His number is 16, represented by 10 yellow rods (each representing 10) and 6 red cubes (each representing 1).
- Girl:** A girl with brown hair and glasses. Her number is 11, represented by 1 bundle of 10 yellow rods (each representing 10) and 1 yellow rod (representing 1).
- Boy 2:** A boy with black hair and glasses. His number is 9, represented by a purple ten-frame with 9 white dots.

The numbers 16, 11, and 9 are written in blue below their respective representations.

Guided practise



Order these numbers from
greatest to smallest

12, 7, 18, 4, 8

Order these numbers
from smallest to
greatest

17, 9, 15, 2, 6

Independent practise

Children to complete the worksheet



Plenary



Is this correct?

I have ordered my
numbers from smallest
to greatest

2, 7, 8, 9, 15

How do you know?

Maths
Learning
Number:
Place Value
(within 20)

Term 3 week 1 lesson 3

In focus



1) These numbers are placed in order from _____ to _____

12, 10, 7, 4

2) What number is this? seventeen

3) What number is missing? 18, __, 20

4) These are placed in order from _____ to _____

11, 12, 18, 20




Lets learn

Count and order these from greatest to smallest.



Teddy



Rosie



Dora



Guided practise



Order these numbers from
greatest to smallest

10, 1, 7, 14, 8

Order these numbers
from smallest to
greatest

20, 6, 9, 11, 8

Independent practise

Children to complete the worksheet



Plenary



Is this correct?

I have ordered my
numbers from greatest to
smallest

20, 15, 11, 7, 8

How do you know?