

Maths
Learning
Number:
Place Value
(within 50)

Term 3 week 5 lesson 1

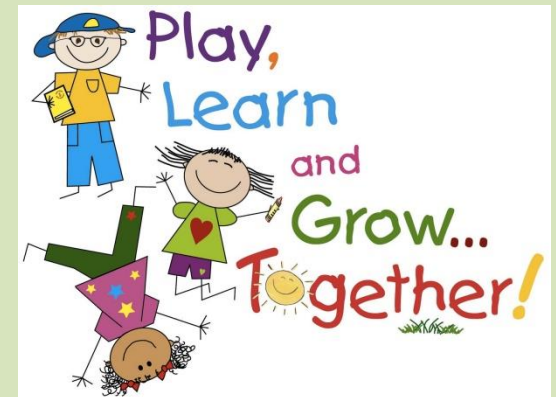
We are learning to...

WALT: count
S2S

(steps to success):

I can:

- count in ones and tens
- draw the tens frame
- form my numbers correctly



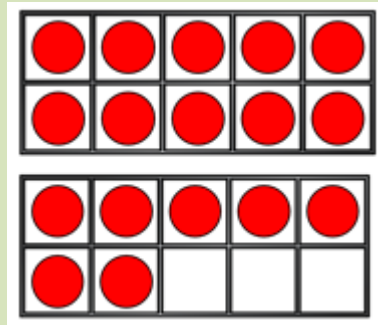
In focus



1) What comes next? 8, 9, 10, ____

2) How do you spell 19?

3) How many counters?



4) 2 tens is equal to ____

Lets learn



How many?

Numbers to 50

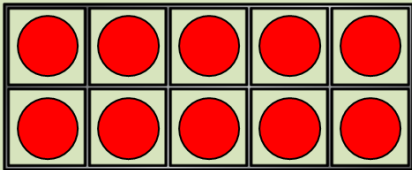
1	2	3	4	5	6	7	8	9	10
11	12	13	14	15	16	17	18	19	20
21	22	23	24	25	26	27	28	29	30
31	32	33	34	35	36	37	38	39	40
41	42	43	44	45	46	47	48	49	50

Can you find these numbers?

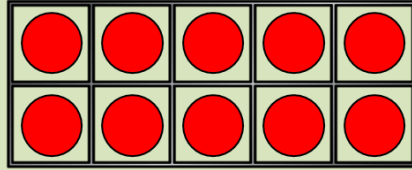
ten twenty thirty
forty fifty

How many counters?

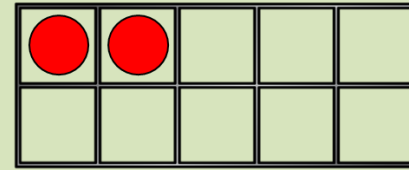
How can we count them?



10



20

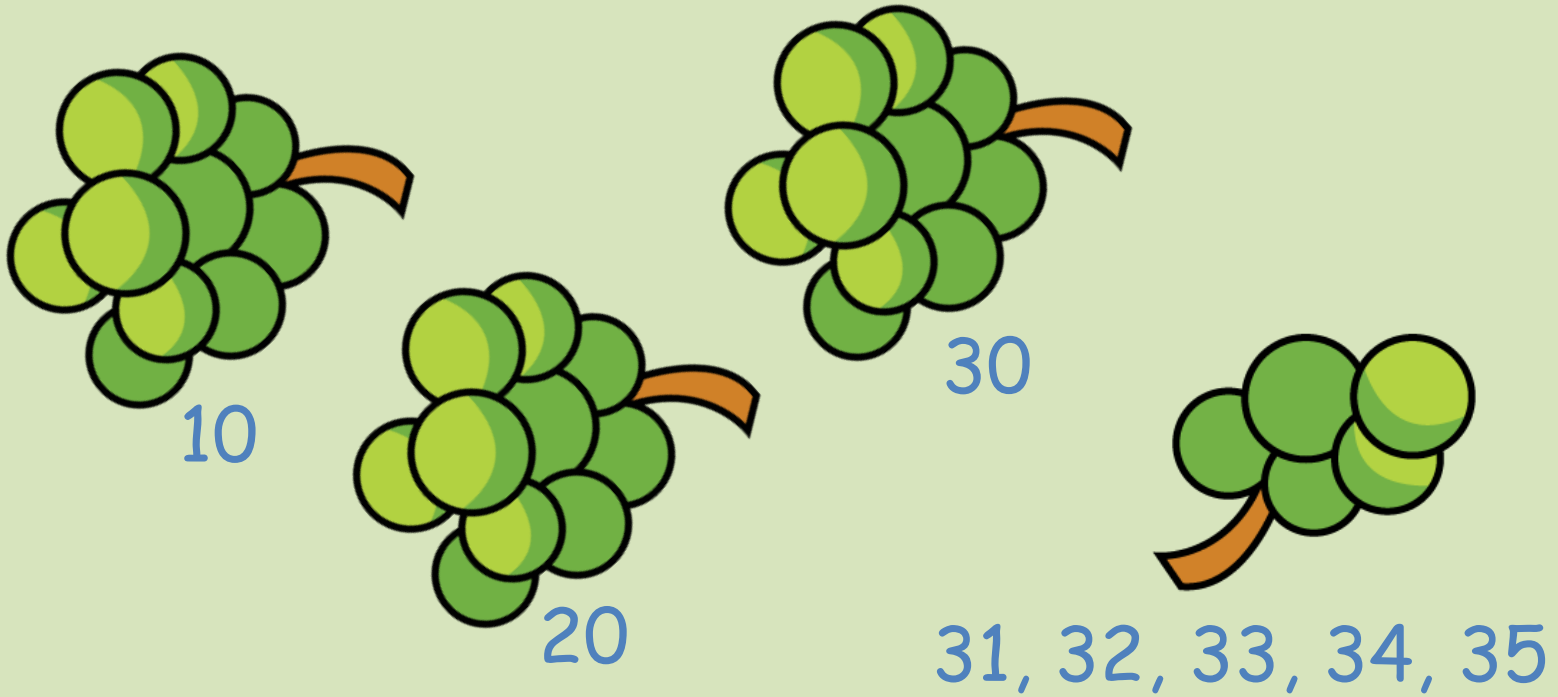


21, 22

There are 22 counters.

How many grapes?

How can we count them?



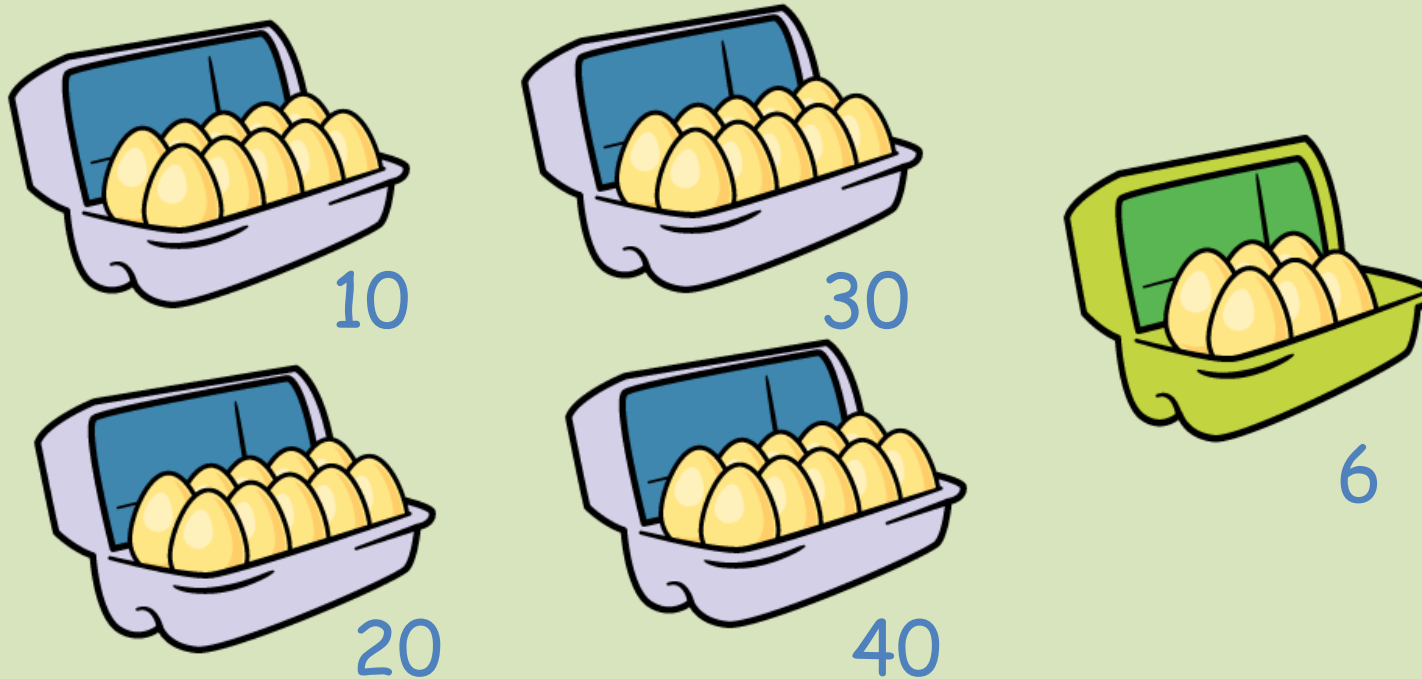
There are 35 grapes.

How many eggs?

Have a think



How can we count them?




There are 46 eggs.

Guided practise



Counting and
finding
numbers...



I need to
organise
these!



There are 27 bears.

Numbers to 50

Have a think



1	2	3	4	5	6	7	8	9	10
11	12	13	14	15	16	17	18	19	20
21	22	23	24	25	26	27	28	29	30
31	32	33	34	35	36	37	38	39	40
41	42	43	44	45	46	47	48	49	50

Can you find these numbers?

thirty-three


twenty-eight

forty-six

fifteen

Counting on a number track

I can count from 19 - 33
with a number track.



19	20	21	22	23	24	25	26	27	28	29	30	31	32	33
----	----	----	----	----	----	----	----	----	----	----	----	----	----	----

Have a think



I can count from 37 - 49
without a number track!



Which of these numbers
will Mo say?



38



40

46

Independent practise

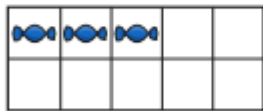


1 a) How many sweets are there?



There are sweets.

b) How many sweets are there?



There are sweets.

c) Which were easier to count? Why?

2 a) Draw counters to show how many pencils there are.



b) Complete the sentence.

There are pencils.

c) How do you know you have counted them all?

3

I am going to count from 21 to 36



Will Rosie say the number 29? _____

How do you know?

Plenary



If I counted down from 50 in 10's my numbers would be:

50, 30, 20, 10, 0

Am I correct? How do you know?

