

Maths  
Learning  
Number:  
Place Value  
(within 50)

Term 3 week 5 lesson 2

# We are learning to...

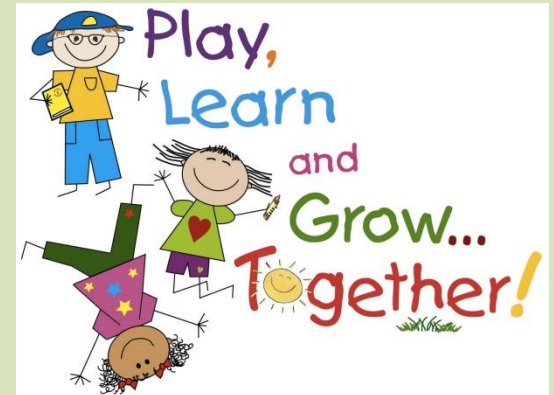
WALT: count forwards  
and backwards

S2S

(steps to success):

I can:

- count using tens frame
- count using base ten
- complete the number lines



# *In focus*



- 1) Find the number 13
- 2) Find the number 43
- 3) Find the number 25
- 4) Find the number 35

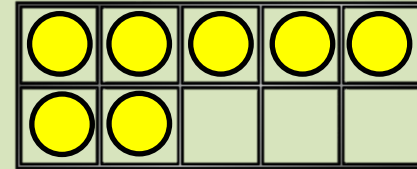
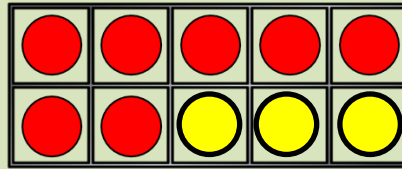
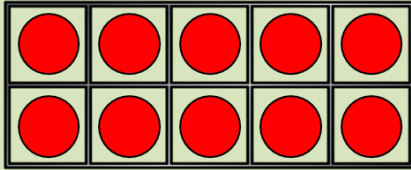
1	2	3	4	5	6	7	8	9	10
11	12	13	14	15	16	17	18	19	20
21	22	23	24	25	26	27	28	29	30
31	32	33	34	35	36	37	38	39	40
41	42	43	44	45	46	47	48	49	50

Lets learn

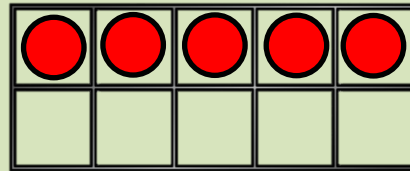

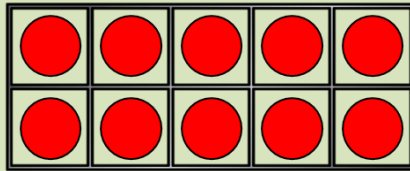
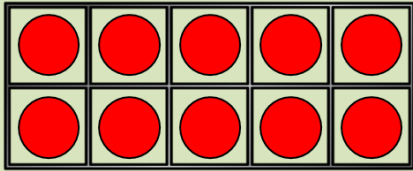


Counting forwards  
and backwards...

# Counting forwards




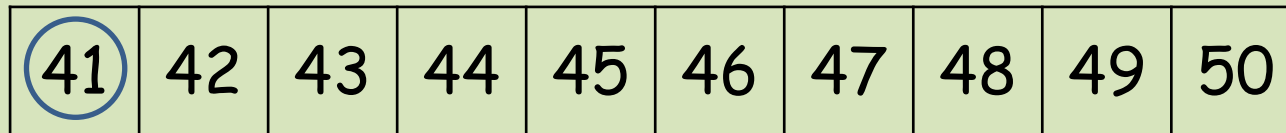
# Counting backwards



Have a think





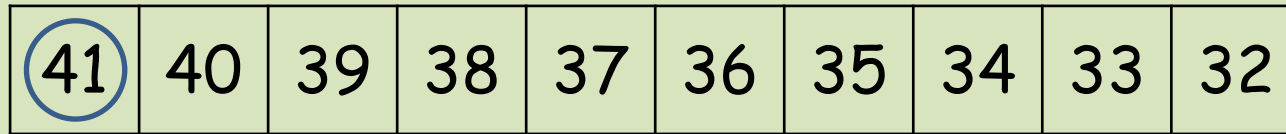
# Counting forwards with a number track



Have a think



# Counting backwards with a number track





Guided practise




Spot the  
mistake...



Have a think



Can you spot the mistakes?



27	28	29	20	31	32	33	34	35	36
----	----	----	----	----	----	----	----	----	----

27	28	29	30	31	32	33	34	35	36
----	----	----	----	----	----	----	----	----	----



38	39	40	41	42	44	45	46	47	48
----	----	----	----	----	----	----	----	----	----

38	39	40	41	42	43	44	45	46	47
----	----	----	----	----	----	----	----	----	----

Have a think



What comes after...

1	2	3	4	5	6	7	8	9	10
11	12	13	14	15	16	17	18	19	20
21	22	23	24	25	26	27	28	29	30
31	32	33	34	35	36	37	38	39	40
41	42	43	44	45	46	47	48	49	50

35 36

22 23

49 50

Have a think



# What comes before...

1	2	3	4	5	6	7	8	9	10
11	12	13	14	15	16	17	18	19	20
21	22	23	24	25	26	27	28	29	30
31	32	33	34	35	36	37	38	39	40
41	42	43	44	45	46	47	48	49	50

13    12

39    38


41    40

# Independent practise

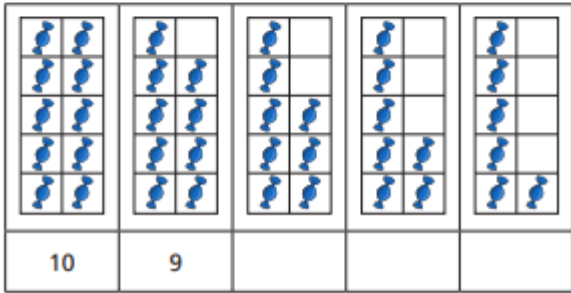


1 Complete the number tracks.

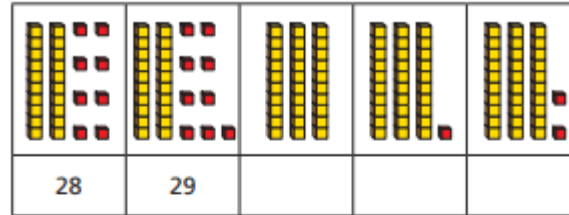
a)



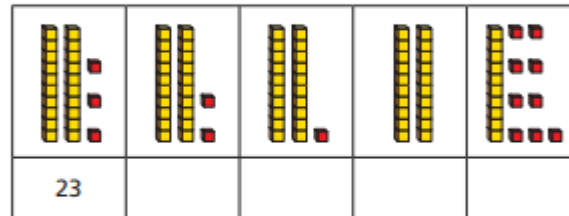
b)



c)



d)



2 Complete the number tracks.

a)



b)



c)



d)




3 a) Which number comes **before** 14?

b) Which number comes **after** 32?

c) What are the next two numbers **after** 29?

 and 

4 Complete the number track.



# Plenary



Can you spot what is missing?

27	28	29	?	31	32	33	?	35	36
----	----	----	---	----	----	----	---	----	----

38	39	40	?	?	?	44	45	46	47
----	----	----	---	---	---	----	----	----	----