







S2S: I can

- say what equal and unequal means
- make unequal and equal groups
- Match equal groups to an addition sum

Cut and stick the repeated addition to the correct picture.

		$2 + 2 + 2 + 2$ $+ 2 + 2 + 2 = \underline{\quad}$
		$5 + 5 + 5 + 5 = \underline{\quad}$
		$10 + 10 + 10$ $+ 10 + 10 = \underline{\quad}$
		$5 + 5 + 5$ $+ 5 + 5 = \underline{\quad}$
		$2 + 2 + 2$ $+ 2 + 2 + 2 = \underline{\quad}$
		$10 + 10 + 10$ $+ 10 = \underline{\quad}$