

Maths
Learning
Number:
Place Value
(within 50)

Term 3 week 6 lesson 2

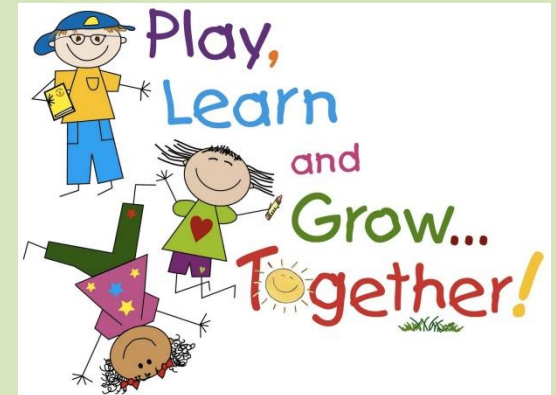
We are learning to...

WALT: find one less and one more S2S

(steps to success):

I can:

- write one less from a given number
- write one more from a given number
- use a number square



In focus



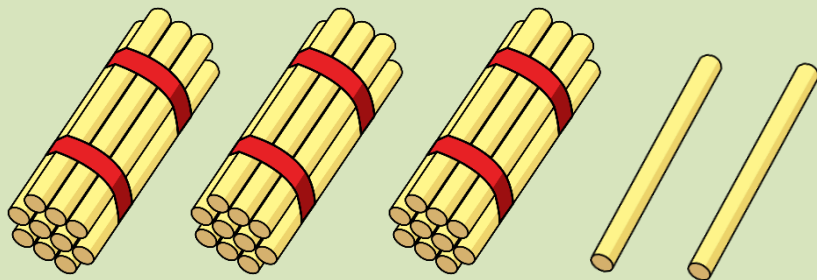
- 1) What comes next? 13, 14, 15, —
- 2) What comes next? 13, 12, 11, —
- 3) Nineteen is one *more or less* than twenty
- 4) Twelve is one *more or less* than thirteen

Lets learn




One more, one
less...

Finding **one more** is like
adding one!



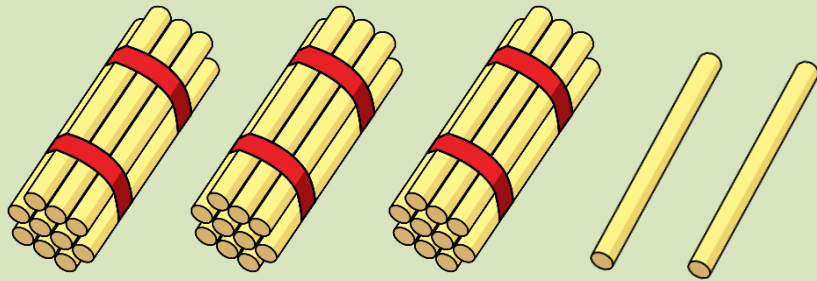
I will give you
one more straw!

I have 3 tens
and 2 ones



One more than 32 is

Finding **one less** is like
subtracting one!





I will take away
one straw!

I have 3 tens
and 2 ones






One less than 32 is

What is one more?






One more than 15 is

What is one more?







One more than 29 is

What is one less?



One less than 28 is

What is one less?



One less than 40 is

Guided practise

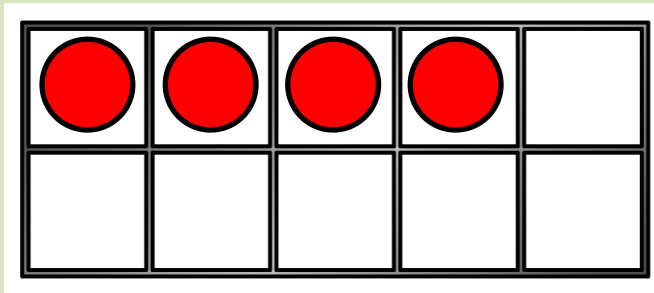
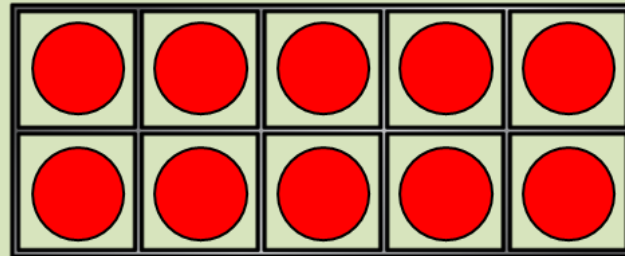
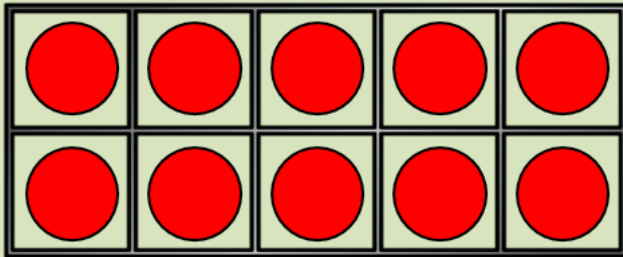


Let's build...

Have a think



Let's build 23
and find one more

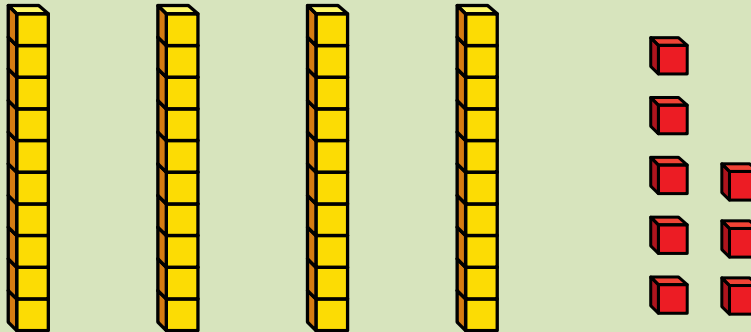


One more than 23 is

Have a think



Let's build 48
and find one less



One less than 48 is

Independent practise



1 Use counters or cubes to make each number.

- a) one more than 21
- b) one more than 34
- c) one less than 41
- d) one less than 30

2 Use different colours to show each number on the grid.

- a) one less than 17 c) one more than 39
- b) one more than 26 d) one less than 50

1	2	3	4	5	6	7	8	9	10
11	12	13	14	15	16	17	18	19	20
21	22	23	24	25	26	27	28	29	30
31	32	33	34	35	36	37	38	39	40
41	42	43	44	45	46	47	48	49	50

3 Fill in the missing numbers.

One less	Number	One more
	31	
31		
		31
47		
		47

4



Whitney

My number has 4 tens. One more than my number would make the tens digit change.



Dexter

My number is one more than forty-five.

Who has the greater number? _____

Plenary



Mrs Less completed the chart below. Is she correct?

One less	Number	One more
31	33	34
4	5	6
26	27	29
46	49	50