

Maths  
Learning  
Number:  
Place Value  
(within 50)

Term 3 week 6 lesson 3

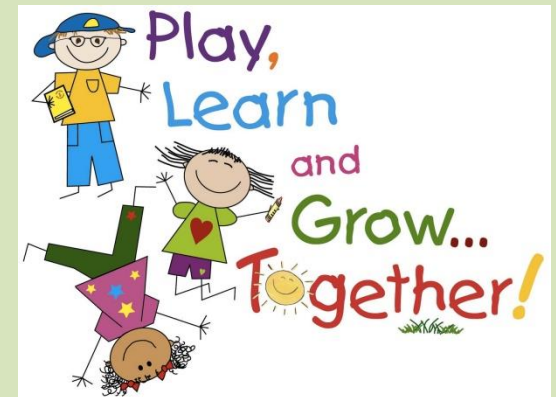
# We are learning to...

WALT: compare objects  
S2S

(steps to success):

I can:

- use less than, more than and equal to symbols
- use a tens frame to show a given number



# In focus



1) Which symbol means 'is equal to'?

$>$   $<$   $=$

2) Which symbol means 'is greater than'?

$>$   $<$   $=$

3) Which symbol means 'is less than'?

$>$   $<$   $=$

4) What is the correct symbol?



Lets learn



Let's compare...

What do we say when we compare objects?



Fewer



More




Is equal to  
=




Less than  
<




Greater than  
>






# Let's compare animals!




The number of  is greater than  
the number of

# Let's compare animals!




The number of  is  than  
the number of 


# How can we compare objects?




There are  donuts



Have a think



There are  biscuits



There are fewer  than

There are more  than



Guided practise



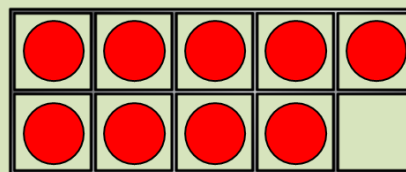
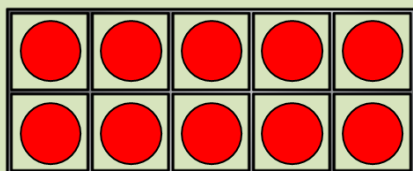
Let's compare...

Let's compare!

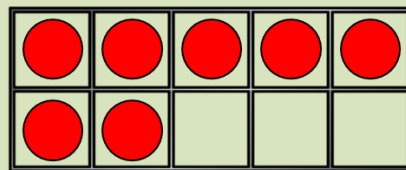
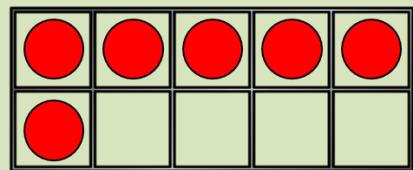
Have a think



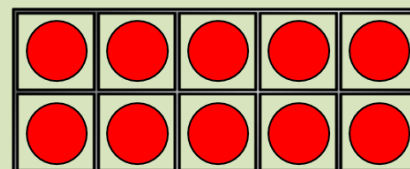
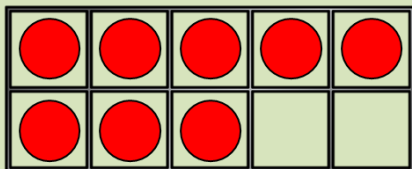
16



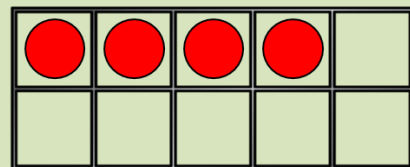
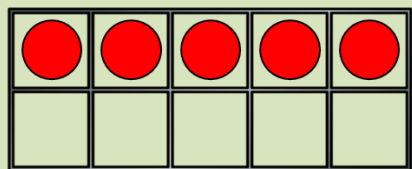
16






13

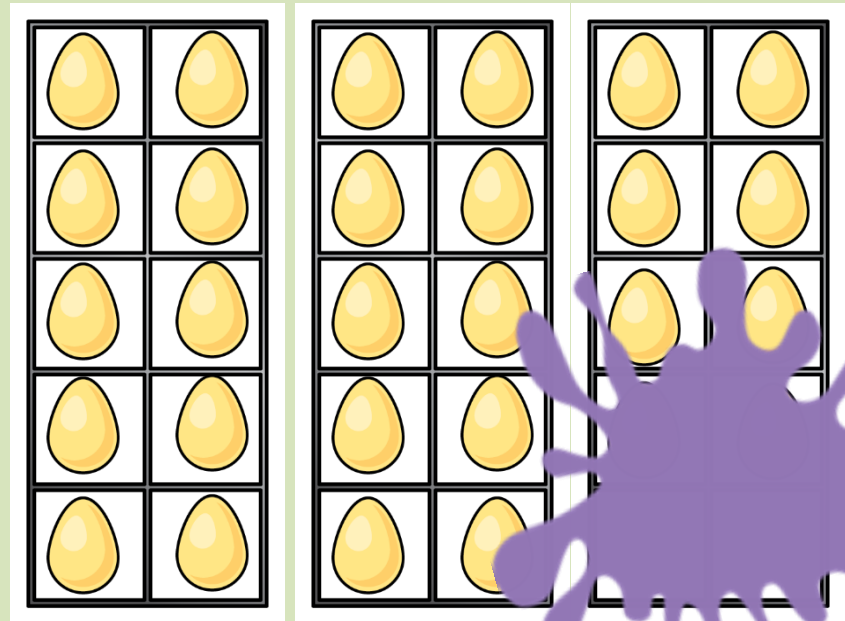


14





Have a think



There are  chicks. There are  eggs.

There are more chicks than eggs.

How many eggs could there be?

# Independent practise



1 a) Draw counters to show the apples.




b) Draw counters to show the children.




c) Complete the sentences.

There are  apples.

There are  children.

There are fewer \_\_\_\_\_ than

\_\_\_\_\_

d)



All the children can have one apple.

Is Teddy correct?

2 Draw counters to make the statements true.

a)

●	●	●	●	●	●		
●	●	●	●	●	●		

>


b)


>

●	●	●	●	●	●		
●	●	●	●	●	●		
●	●	●	●	●	●		

c)

●	●	●	●	●	●		
●	●	●	●	●	●		

<

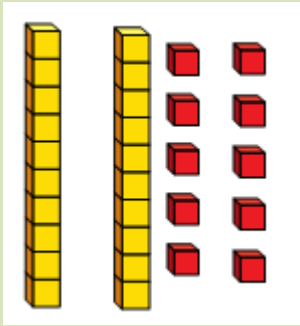

d)

●	●	●					
	●	●	●				

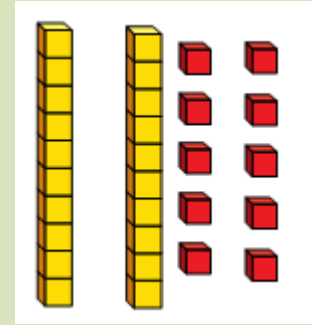
=


Is there more than one answer for each?

# Plenary



*is more than*



*Am I correct? How do you know?*