



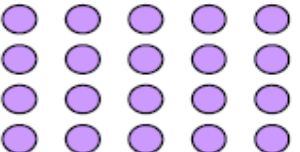



WALT make arrays

S2S I can

- say what a row and a column is
- Make/draw arrays
- find a total using arrays

Describe the arrays and write two number sentences to represent the array.

Array	Description - Rows	Description - Columns	Number sentences
	_____ rows. _____ in each row.	_____ columns. _____ in each column.	
	_____ rows. _____ in each row.	_____ columns. _____ in each column.	
	_____ rows. _____ in each row.	_____ columns. _____ in each column.	
	_____ rows. _____ in each row.	_____ columns. _____ in each column.	
	_____ rows. _____ in each row.	_____ columns. _____ in each column.	
	_____ rows. _____ in each row.	_____ columns. _____ in each column.	