


WALT make arrays

S2S I can

- say what an equal group and an array is
- make equal groups and arrays
- describe equal groups and arrays


1 Complete the sentences below.

a 

There are _____ equal groups with _____ in each group.

There are _____ 5s.


_____ + _____ = 10

b 

There are _____ equal groups with _____ in each group.

There are three _____ s.

_____ + _____ + _____ = 18


c 

There are _____ equal groups with _____ in each group.


There are two _____ s.

_____ + _____ = 24

Match the picture to the correct number sentences.



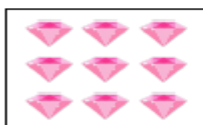
$3 + 3 + 3$



$4 + 4 + 4$



$6 + 6 + 6$



$5 + 5 + 5$

Jack says the picture below shows $3 + 3 + 3 + 3 + 3$.



Is Jack correct? Explain how you know.
