






Lesson 3

Walt: Count pounds and pence

S2S: I

- know the value of each pound and note
- know the same value can be represented in different ways
- can add coin values to find the total amount

I. Match the coin or note to its value

16p	
twenty-five pence	
£25	
sixty pence	
twenty pounds	


2. How much money does each person have?


a)   £


b)   p


c)   p

3.

 I can make the same amount of money in many ways.









What amount has Mo made? £


Make this amount another way.

Draw your coins.

4. Count the money

a)  £ and p

b)  £ and p

c)  £ and p

5.

Jack has 4 silver coins and Rosie has 5 silver coins.
Show that Jack can have more money than Rosie.

