

*"Good Morning Year 3"*

Thursday 25th February 2021



Week 1

Lesson 4



How are you feeling today?

*confident*

*relaxed*

*excited*

*sleepy*

*happy*

*curious*

# Starter – to warm up our brains



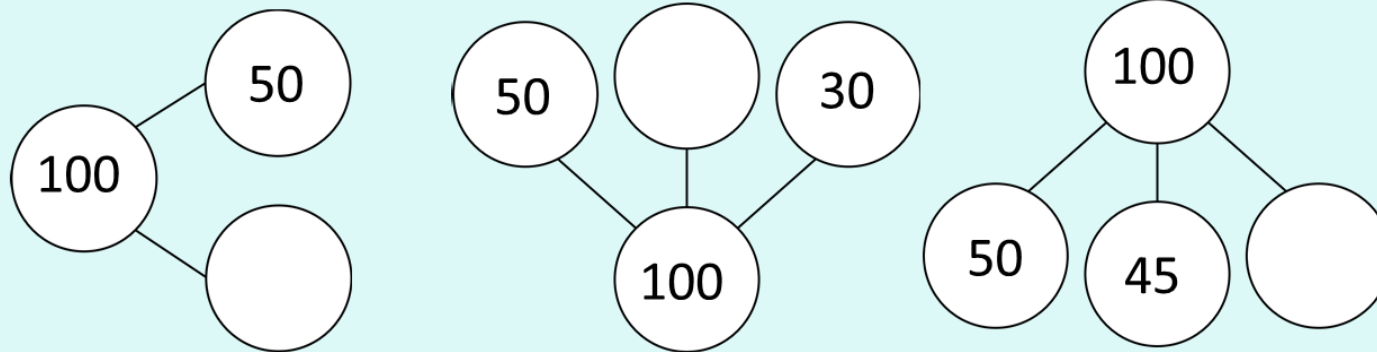
1) How much does Ron have?



2) Which sets of coins total 50p?



3) Complete the part-whole models.



Walt: convert pounds and pence

S2S: I can


- apply my knowledge of number bonds to 100
  - group 100 pennies into pounds
    - convert pounds to pence



Let's learn



# How many pennies are in £1?



=



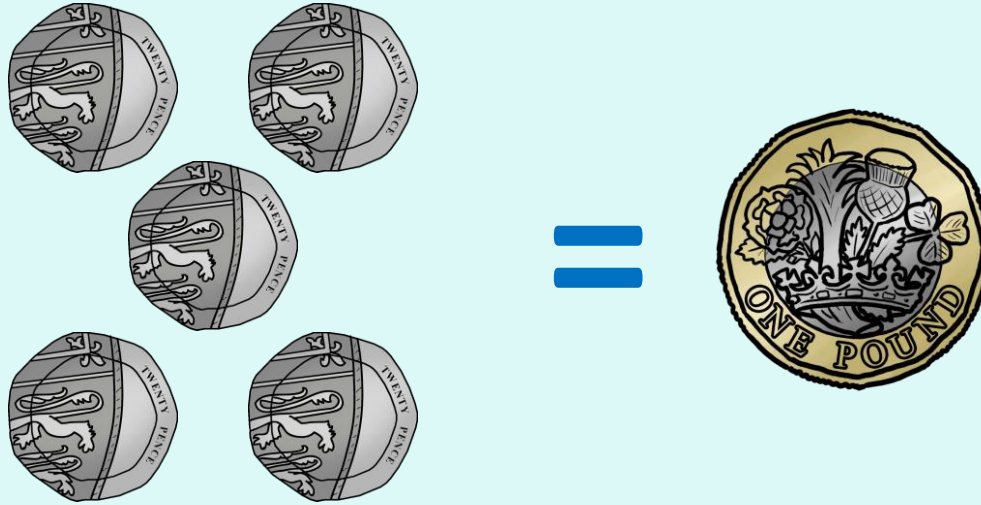
100 p = £1

# How many 10p coins make £1?





# How many 20p coins make £1?



# How many 50p coins make £1?



=



# Guided practice



Circle £1 in each set.

£1 = 100p



How many coins on the left make  
the coin on the right?



X

=



X

=



X

=



X

=



# Tiny is exploring different ways to make £1

$$£1 = 100p$$

I think I have lost a coin from each set.



$$50p + \square = 100p$$



$$50p + 20p + 10p + \square = 100p$$

80p



$$50p + 20p + 10p + 10p + 5p + \square = 100p$$

95p

Have a think



How much does Rosie have?




I can see two 50 pence coins. They make £1



How much does Rosie have?



Have a think 



Over to you -  
independent learning



# Problem solving

Which items can Mark buy?



I have £2.90




185p



329p



255p



122p


## Reflection – Traffic Lights


Where did I get to today?


I can now.....


I need more practice with...

I still need to learn how to .....



 ... apply my knowledge of number bonds to 100.

 ... group 100 pennies into pounds.

 ... convert between pounds and pence.