

*"Good Morning Year 3"*

Wednesday 24th February 2021



Week 1

Lesson 3



How are you feeling today?

*confident*

*relaxed*

*excited*

*sleepy*

*happy*

*curious*



# Starter – to warm up our brains





Find the totals.





# Starter – to warm up our brains

## Find the totals.



Walt: count pounds and pence

S2S: I

- know the value of each coin and note
  - know the same value can be represented in different ways
- can add coin values to find the total amount




Let's learn



# British money is made up of coins and notes.


## How many can you recognise?





**British coins are three different colours.**

**Copper coins are worth  
1p and 2p**



**Silver coins are worth  
5p, 10p, 20p and 50p**



**Gold coins are worth  
£1 and £2**




How many 1p coins in 10p?




How many 10p coins in £1?



Which of these represent £14?



Have a think



Who has the most money?  
Who has the least?



Jack



Amir



Have a think




How much does Whitney have?




# How much does Rosie have?



Have a think 

Alex has these coins.




She drops one of her coins.  
How much could she have left?

# Guided practice







To find the total values of the notes and coins, first add the pounds and then the pence.



# Compare the amounts of money.



Over to you -  
independent learning



**Salem has one note and three different coins  
in his piggy bank.**



**What is the greatest and least amount of  
money he could have inside?**

**Problem solving**


## Reflection – Traffic Lights


Where did I get to today?


I can now.....


I need more practice with...

I still need to learn how to .....



 ... know the value of each coin and note.

 ... know the same value can be represented in different ways.

 ... add coin values to find the total amount.