


WALT recognise the multiplication symbol

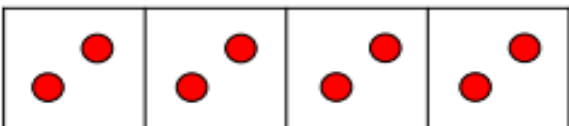
- I know what the x symbol is
- I can use a x symbol to describe equal groups
- I can begin to solve multiplication problems

1 Complete the sentences to describe the equal groups.

a  _____ + _____ + _____ = 15
 _____ x _____ = 15

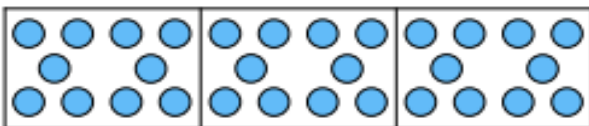
There are _____ equal groups with _____ in each group.

There are three _____s.

b  _____ + _____ + _____ + _____ = 8
 _____ x _____ = 8

There are _____ equal groups with _____ in each group.

There are four _____s.

c  _____ + _____ + _____ = 30
 _____ x _____ = 30

There are _____ equal groups with _____ in each group.

There are three _____s.

2 Complete the table below.

Addition	Multiplication
5 + 5 + 5 + 5	
	3 x 2
10 + 10 + 10 + 10 + 10	
	6 x 5