

Good Morning
Year 2

Wednesday 24th February 2021

Term 4 Week 1

Time Table

Morning



Tricky fingers



Phonics/Spelling shed



Assembly



Maths



Break



Zoom call check in & story



English

Afternoon

- Lunch
- Independent Reading/Read your spellings
- Foundation subject
- Times tables practice
- Home time

Tricky Fingers

8.40-9am

Get your fingers working!

- Play with some Lego or similar

Or

- Draw/colour a picture
- Sing and dance our “Wake up, Shake up” routine

Phonics 9-9.30am

Practise and learn these spellings from our common exception word list. They are on spelling shed to play there too.

<https://www.spellingshed.com/en-gb/>

eye, could, should, would, who, whole, any, many



Log into Education City.
Your Pass word is on your blue sheet.
Find the class work section 'My City'
that has been set for you.
Look for the Bee phonics icon
Term 4 Week 1.
Then select the Mouse in the house
Write down 5 words that use the 'ou'
spelling pattern.

Assembly

9.30-9.45ish

- Listen to a story and sing along
- https://www.youtube.com/watch?v=fj_z6zGQVyM
- Pete the Cat: I Love My White Shoes

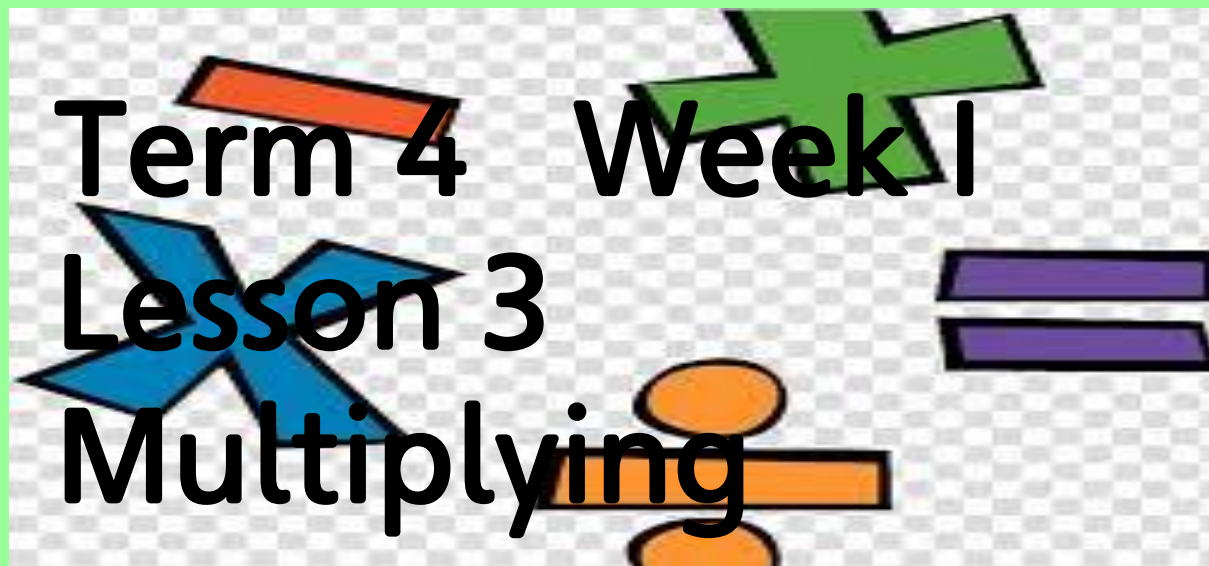
Maths

9.45ish-10.30am

- Follow the link here for recording of Maths input
- Share recording with viewers:
https://us02web.zoom.us/rec/share/WQZdvgLkLrQS8zZ09crSTeaTaw1ZdmQLP5f89bN1_MpJDjPLUsF-3ivyJwGz6MVq.xfxhRwD102orajyc

-

The sheets are on the class website but you can just write your answers in the back of your home learning book.



Term 4 Week 1

Lesson 3

Multiplying

Starter

<http://www.snappymaths.com/multiplication/earlymult/interactive/repadd/repaddframe.htm>

WALT recognise the multiplication symbol

S2S I can

- say what the x symbol is
- use a x symbol to describe equal groups
- match multiplication to repeated addition number sentences

Can you remember this symbol? Tell your partner what it is.
What does it mean? What does it help us do?

Practise writing some on your whiteboard or in the air.



Lots of

Everyone write: 1 lot of 2 = 2

Ask: How could we write that using a multiplication sign?

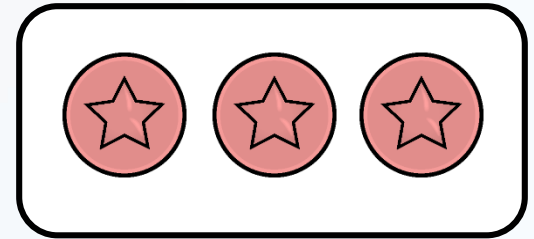
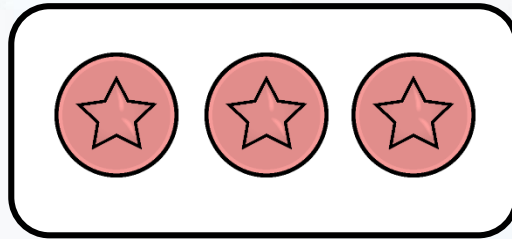
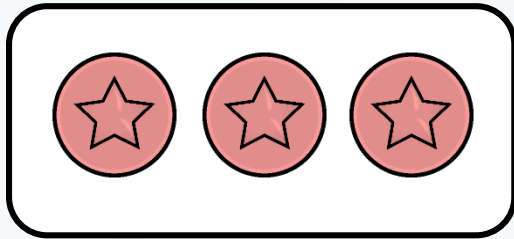
$$1 \times 2 = 2$$

Write these as a number sentence

- 2 lots of 2
- 2 lots of 2
- 3 lots of 2
- 4 lots of 2

Did you use the multiplication sign?
Let's look a few together.

Complete:

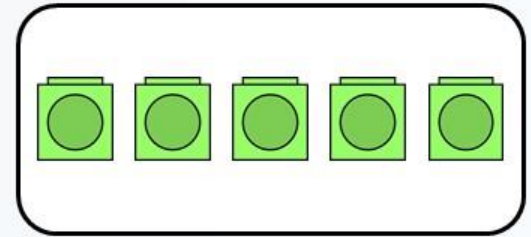
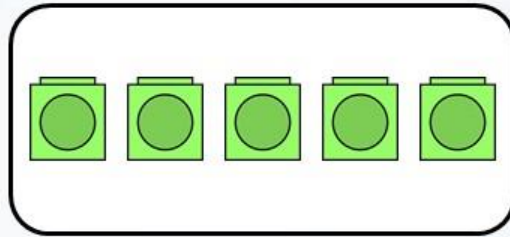
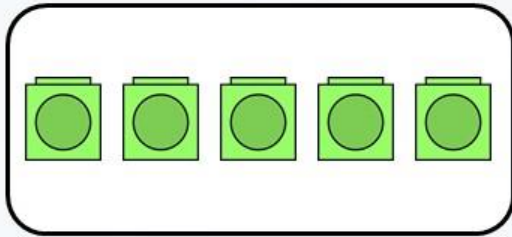


$$\underline{3} \times \underline{3} = \underline{9}$$

$$\underline{3} \text{ lots of } 3 = \underline{9}$$

$$\underline{3} \text{ multiplied by } \underline{3} = 9$$

Complete:

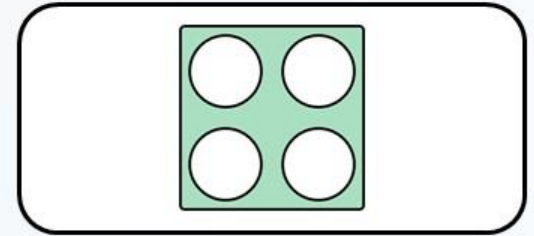
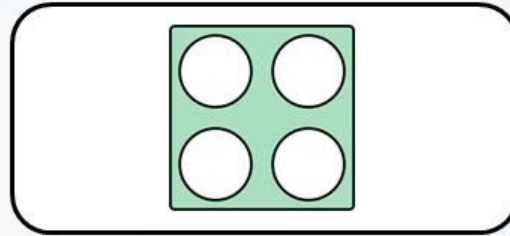
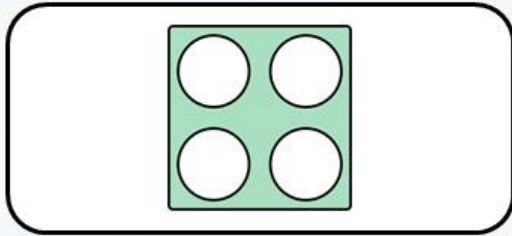


$$\underline{3} \times \underline{5} = \underline{15}$$

$$\underline{3} \text{ lots of } 5 = \underline{15}$$

$$\underline{3} \text{ multiplied by } \underline{5} = 15$$

Complete:

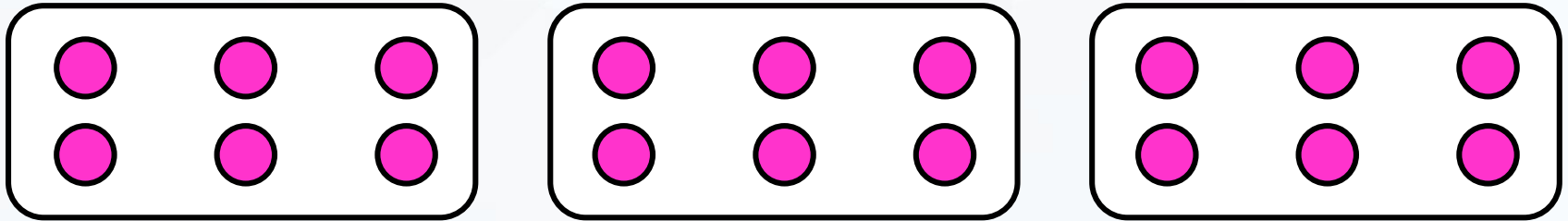


$$\underline{3} \times \underline{4} = \underline{12}$$

$$\underline{3} \text{ lots of } 4 = \underline{12}$$

$$\underline{3} \text{ multiplied by } \underline{4} = 12$$

Complete:



$$\underline{3} \times \underline{6} = \underline{18}$$

$$\underline{3} \text{ lots of } 6 = \underline{18}$$






$$\underline{3} \text{ multiplied by } \underline{6} = 18$$

Today we are going to play a matching game.

You can use the first sheet or both if you want a challenge!

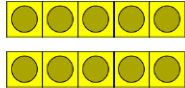




Group match up ★ ★ ☆

Cut out the cards and match the picture to its addition and multiplication number sentences.

	$7 + 7$	2×3
	$3 + 3$	10×5
	$2 + 2 + 2 + 2 + 2$	5×2
	$5 + 5 + 5$	2×7
	$5 + 5 + 5 + 5 + 5 + 5 + 5 + 5 + 5 + 5$	3×5

Group match up

Cut out the cards and match the picture to its addition and multiplication number sentences..






	$3 + 3 + 3 + 3 + 3$	5×3
	$11 + 11 + 11 + 11 + 11 + 11 + 11 + 11 + 11 + 11$	3×5
	$5 + 5$	5×2
	$2 + 2 + 2 + 2 + 2$	2×5
	$5 + 5 + 5$	10×1

Answers

Answers - Group match up



Cut out the cards and match the picture to its addition and multiplication number sentences.

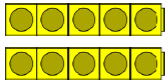




	$3 + 3$	2×3
	$5 + 5 + 5$	3×5
	$7 + 7$	2×7
	$5 + 5 + 5 + 5 + 5 + 5 + 5 + 5 + 5 + 5$	10×5
	$2 + 2 + 2 + 2 + 2$	5×2

© Pearson Education

Answers - Group match up



Cut out the cards and match the picture to its addition and multiplication number sentences.

	$5 + 5$	2×5
	$5 + 5 + 5$	3×5
	$3 + 3 + 3 + 3 + 3$	5×3
	$11 + 11 + 11 + 11 + 11 + 11 + 11 + 11 + 11 + 11$	10×11
	$2 + 2 + 2 + 2 + 2$	5×2

Challenge

Complete the table.


The first one has been done for you.

Addition	Multiplication
$2 + 2 + 2 + 2$	4×2
$5 + 5 + 5$	
$3 + 3 + 3 + 3 + 3$	
	2×10

Break

10.30-10.45am

- **Have a walk or play with some toys**
- **Have a drink of water and a fruit snack**



Zoom Call Check in 10.45-11am

- Hello Year 2 how are you doing today?
- Zoom link on parentmail



English

11am-12pm

English Input video

Share recording with viewers:

<https://us02web.zoom.us/rec/share/-eLKChMtS0syYaOIDDzTzf603tY6Tg7JC9YUZYXZx0bM4-HKGJMju9lhFzyG7M6A.6zNGadrqYWgrm1pX>

Wednesday 24th January 2021

WALT: answer questions

S2S: I can

- read key information
- skim and scan for answers
- show my understanding

Can you spot any features of information text?

Question:
What are cats whiskers used for?

What is important word in question?
Skim and scan the text.

Question:
What do cats use to grip with?

What is important word in question?
Skim and scan the text.

All About Cats

What Are Cats?

Cats are furry mammals with four legs. They are kept as pets all over the world.



What Sounds Do Cats Make?

Cats can make lots of different sounds. Kittens meow at their mothers. Cats also purr when they are happy. They hiss when they are angry.



Did You Know...?

Adult cats do not meow at each other. They only meow at humans when they need something, like food.

What Do Cats Eat?

Cats are carnivores, which means that they eat meat. This gives them what they need to stay fit and healthy.

They are very good hunters and often catch birds and mice.



Did You Know...?

Cats can see in the dark. This helps them to spot small animals moving at night.

What Do Cats Do?



Cats love to play. This helps them with chasing and catching mice.



Cats can jump very high into the air. They always land on their feet.



Cats are good at climbing. They use their claws to grip.



Cats spend most of their time asleep!

What technical word tells you cats eat meat?

What are cats very good at being?

Why is it good that cats love to play?

How does seeing in the dark assist cats at night?

Questions

1. What kind of animal is a cat? **Tick one.**

- ☐ a bird
- ☐ a reptile
- ☐ a mammal

2. What do cats use their claws for?

3. What sound do cats make when they are angry? **Tick one.**

- ☐ meow
- ☐ purr
- ☐ hiss

4. Fill in the missing word.

Cats can _____ in the dark.

5. What do cats spend most of their time doing? **Tick one.**

- ☐ climbing
- ☐ playing
- ☐ sleeping

Challenge questions

- a) What are cats whiskers used for?
- b) What do cats use to grip with?
- c) What technical word tells you cats eat meat?
- d) What are cats particularly good at being?
- e) Why is it good that cats love to play?
- f) How does seeing in the dark assist cats at night?

Answers

1. What kind of animal is a cat? **Tick one.**

- ☐ a bird
- ☐ a reptile
- ☒ **a mammal**

2. What do cats use their claws for?
gripping/climbing

3. What sound do cats make when they are angry? **Tick one.**

- ☐ meow
- ☐ purr
- ☒ **hiss**

4. Fill in the missing word.

Cats can see in the dark.

5. What do cats spend most of their time doing? **Tick one.**

- ☐ climbing
- ☐ playing
- ☒ **sleeping**

Challenge Answers

- a) measure spaces
- b) Claws
- c) Carnivore
- d) Hunters
- e) because it helps with chasing and catching mice
- f) So they can spot small animals in the dark.

Lunch

12-1pm

- **Have a walk, draw a picture or play with some toys**
- **What will you eat for lunch today?**



Reading and Story time

1-1.30pm

- Own independent Reading 1pm-1.15pm
- Follow the link below and choose a story to listen to
- <https://www.bbc.co.uk/iplayer/episodes/b00jdlm2/cbeebies-bedtime-stories>

Reading and Fast Learning

1-1.30pm

- Own independent Reading 1pm-1.15pm
- Fast Learning: Read and copy these sentences in your best hand writing.
- Tabby McTat was a busker's cat, with a meow that was loud and strong. The two of them sang of this and that, and people threw coins in an old checked hat. And this was their favourite song; "Me, you and the old guitar, how perfectly, perfectly happy we are. MEEE-EW and the old guitar, How PURRRR-fectly happy we are."
-
- Challenge: underline the nouns and circle the verbs.

Music

1.30-2.30pm

Wednesday 24th February 2021

WALT: review songs

S2S: I can

- give my opinion
- give reasons

Music

Listen to these three songs from the musical Cats and review.

- Skimbleshanks the Railway Cat
- <https://www.youtube.com/watch?v=XElighx3BSk>
- Mungojerrie and Rumpleteazer
- <https://www.youtube.com/watch?v=861jN3mKE9Q>
- Memories
- <https://www.youtube.com/watch?v=mdBVJbzkogo>



Music Review questions


1. Give each song a star rating.
2. Which is your favourite song and why?
3. Which song is slow?
4. Which song is fast?
5. What do you like about your favourite?
6. What does it make you think of when listening to it?
7. Would you like to listen to more songs from this musical? Why?



PDF sheet available
but can just write
answers in your book.

Wednesday 25th February 2021 **Music**
WALT: review songs
SZS: I can

- [give my opinion](#)
- [give reasons](#)



★★★★★ It was amazing.
★★★★★ Really liked it.
★★★★★ Liked it.
★★★★★ It was okay.
★★★★★ Did not like it

1. Give each song a star rating.
2. Which is your favourite song and why?
3. Which song is slow?
4. Which song is fast?
5. What do you like about your favourite?
6. What does it make you think of when listening to it?
7. Would you like to listen to more songs from this musical? Why?

Times tables Maths



PRACTISE YOUR
TWO TIMES TABLES



TIMES TABLES HIT
THE BUTTON



[CLICK HERE 3](#)



WEEK 6 X5

Home time
3pm



I HOPE YOU HAD
A WONDERFUL
DAY 😊



ENJOY YOUR
TIME AT HOME



SEE YOU
TOMORROW



YEAR 2 TEAM 😊

THANK YOU FOR
SENDING YOUR
LEARNING ON
CLASS DOJO